

Name: \_\_\_\_\_

Date of Birth : \_\_\_\_\_

Age : \_\_\_\_\_

School: \_\_\_\_\_

Date : \_\_\_\_\_

*Show me how you tie your shoelaces*



**Can you show me your left hand?**

**Can you show me your right foot?**

**How long can you stand still for?**

*Show me how you tie your school tie*



***To write with I use my ..... (please circle)***

Left Hand




Right Hand



- 1) Can you draw a number 8 in the air using your hand?***
- 2) Can you state the months of the year to me? January ..... etc etc***
- 3) Can you say the alphabet to me?***
- 4) Can you count backwards from 20 please.***

***Draw a clock with hands and numbers  
in the box opposite***



***Telling the time***

Can you tell the time on a digital clock?

**03.45**

Can you tell the time on a 24 hour clock?

**14:20**

**18:40**

**22:30**

Can you tell the time on an analogue clock?


Show me a demonstration of 6 o'clock and 3.15pm



***Draw a house in the box below***



***Draw a person in the box below***




***Ruler skills***

Use a ruler to draw a line and measure it.

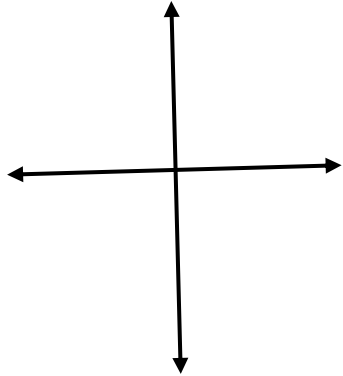
How long is it ..... cms.

Draw over these lines with a ruler using a coloured pen

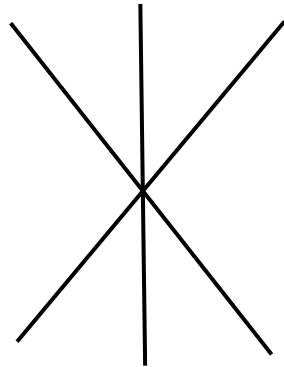


***Can you copy the images into the boxes below.***


1.



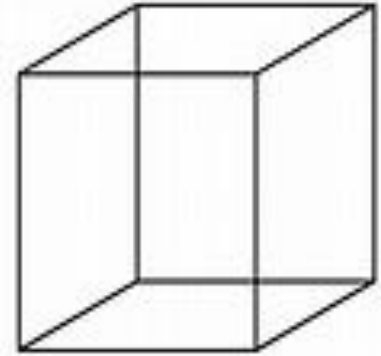
2.



3.



4.



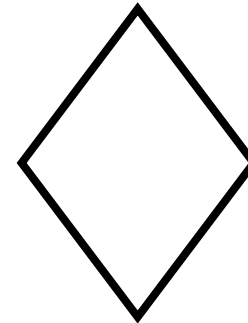

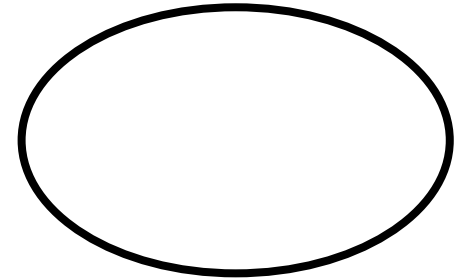




1.

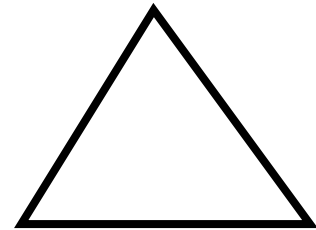
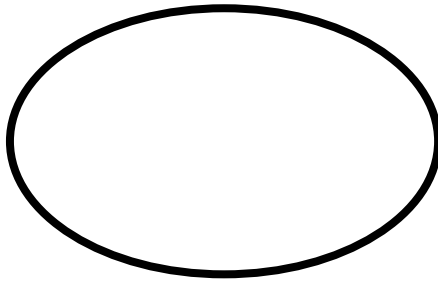

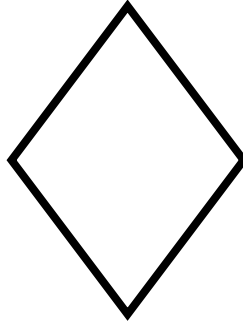



2.

3.

4.

*Cut out the shapes below and glue them over the top of the shapes on the last page*







## Teacher Assessment sheet

Equipment required: pen, pencils, coloured pencils, stopwatch, glue and scissors.

Make notes during each task student is given.

<b>TASK</b>	<b>OBSERVATIONS MADE</b>
Knows their date of birth	
Knows today's date	
Shoes laces	
School tie	
Left hand	
Right foot	
Standing still	Record time
Left/right handed	
Drawing a number 8	
Months of the year	

<b>TASK</b>	<b>OBSERVATIONS MADE</b>
Alphabet	
Counting backwards	
Drawing of a clock	
Time – 03.45	
Time - 14.20	
Time - 18.40	
Time - 22.30	
Analogue clock time	
Demonstrate 6 o'clock	
Demonstrate 3.15am	
Drawing of a house	
Drawing of a person	

<b>TASK</b>	<b>OBSERVATIONS MADE</b>
Ruler skills	
Drawing of image 1	
Drawing of image 2	
Drawing of image 3	
Drawing of image 4	
Cutting skills	
Matching shapes	
Gluing shapes	